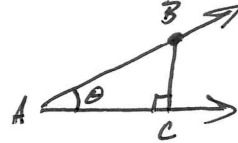


Examlet 3 Advanced Geometry 4/12/13

1. a) State the definition of $\sin \theta$ for an acute angle θ .

Let θ be an acute angle, and call its vertex A . Pick a point on one of its rays and label it B , then drop a perpendicular to the other ray and call its foot C . Now define

$$\sin \theta = \frac{BC}{AB}$$



- b) State the definition of a square.

A square is a quadrilateral that is both a rectangle and a rhombus.

- c) State the definition of the interior of $\triangle ABC$.

The interior of $\triangle ABC$ is the intersection of the interiors of the three angles $\angle ABC$, $\angle BCA$, and $\angle CAB$.

2. a) State the Fundamental Theorem on Similar Triangles.

If $\triangle ABC$ and $\triangle DEF$ are 2 \triangle 's s.t. $\triangle ABC \sim \triangle DEF$,

then $\frac{AB}{AC} = \frac{DE}{DF}$

Good

b) State the Law of Cosines.

For any $\triangle ABC$, $c^2 = a^2 + b^2 - 2ab \cos C$.

Good

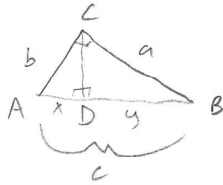
c) State the Neutral Area Postulate.

For each polygonal region R , there is an associated non-negative $\# \alpha(R)$, called the area of R , s.t. the following conditions are satisfied:

① congruence: If 2 polygons have congruent polygonal regions, then the polygonal regions have equal areas.

② additivity: If the polygonal region R is the union of 2 polygonal regions R_1 & R_2 , that do not overlap, then $\alpha(R) = \alpha(R_1) + \alpha(R_2)$.

Excellent




3. Prove the Pythagorean Theorem.

Let $\triangle ABC$ be a right triangle with right angle at $\angle C$ (hyp). Drop a perpendicular from C to \overleftrightarrow{AB} and we know the foot, D , is on \overline{AB} (4.8.6). By the angle sum thm we know $\mu(\angle A) + \mu(\angle B) = 90^\circ$ and we know $\mu(\angle A) + \mu(\angle ACD) = 90^\circ$. Thus $\mu(\angle B) = \mu(\angle ACD)$ (alg). Similarly we can find that $\mu(\angle B) = \mu(\angle BCD)$ (Angle sum thm). Thus, by definition we know $\triangle ABC \sim \triangle ACD \sim \triangle CBD$.

Let $x = AD$, $y = DB$. We know by the similar triangles thm that $\frac{x}{b} = \frac{b}{c}$ and $\frac{y}{a} = \frac{a}{c}$ so we know $b^2 = xc$ and $a^2 = yc$ (alg). Adding these equations, we get $a^2 + b^2 = c(x+y)$ but since $x+y=c$ we have $a^2 + b^2 = c^2$ (sub). \square

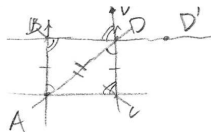
Well
done

4. Show that if $\square ABCD$ is a parallelogram, then the opposite sides are congruent.



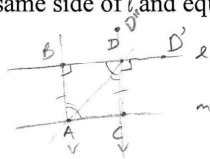


Let $\square ABCD$ be a parallelogram. We know \overleftrightarrow{AC} is a transversal that cuts parallel lines \overleftrightarrow{DC} and \overleftrightarrow{AB} so $\angle DCA \cong \angle BAC$ (conv alt int angles). Similarly \overleftrightarrow{AC} is a transversal that cuts parallel lines \overleftrightarrow{AD} and \overleftrightarrow{BC} so $\angle DAC \cong \angle ACB$ (conv alt int angles). And since $\overline{AC} \cong \overline{AC}$ we have $\triangle ACD \cong \triangle CAB$ (ASA). Thus, by the definition of congruent triangles we know corresponding sides are congruent, that is $\underline{\overline{DC}} \cong \underline{\overline{AB}}$ and $\underline{\overline{AD}} \cong \underline{\overline{BC}}$. \square

Excellent.



5. Prove that if l and m are distinct lines and there exist two different points of m that are on the same side of l and equidistant from l , then $l \parallel m$.



Well, let A and C be the two points on m that are equidistant from l . Then by the existence and uniqueness of perpendiculars we know there are lines \overleftrightarrow{AB} and \overleftrightarrow{CD} that are perpendicular to l in such a way that B and D are the feet of the perpendiculars respectively. Thus we have that $\angle ABD \cong \angle CDD'$ (where D' is a point as shown in the figure). By Corresponding Angles Thm we know $\overleftrightarrow{AB} \parallel \overleftrightarrow{CD}$.

Since A and C are equidistant from l , we know $\overline{AB} \cong \overline{CD}$. We know \overleftrightarrow{AD} is a transversal cutting two parallel lines \overleftrightarrow{AB} and \overleftrightarrow{CD} so conv to alt int angles tells us $\angle BAD \cong \angle CDA$, and since $\overline{AD} \cong \overline{AD}$, then SAS tells us $\triangle ADB \cong \triangle DAC$. Thus by the def of congruent triangles we know $\angle ACD \cong \angle DBA$. And since $\overleftrightarrow{AB} \parallel \overleftrightarrow{CD}$ and \overleftrightarrow{BD} is a transversal cutting them we know by conv to the alternate int angles thm that $\angle ABD \cong \angle BDD''$ (where D'' is defined as in the figure). Thus we have $\angle ACD \cong \angle ABD \cong \angle BDD''$ so by corresponding angles thm we know $\overleftrightarrow{BD} \parallel \overleftrightarrow{AC}$, thus $l \parallel m$.

Good!