

Examlet 3 Advanced Geometry 4/10/15

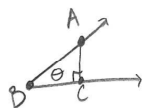
1. a) State the Fundamental Theorem on Similar Triangles.

If $\triangle ABC \sim \triangle DEF$, then $\frac{AB}{AC} = \frac{DE}{DF}$.

Good

W

- b) State the definition of $\cos \theta$ for an acute angle θ .



Let the vertex of θ be B, and let A be a point on one of the rays that make θ . Drop a perpendicular from A to the other ray and call the foot C. Then $\cos \theta = \frac{BC}{BA}$.

Good

- c) Let $\triangle ABC$ be a triangle. State the definition of the associated triangular region.

$\triangle ABC$ is the union of $\triangle ABC$ with all of the internal points

for $\triangle ABC$.

Good

2. a) State the Neutral Area Postulate.

Associated with each polygonal region R is a nonnegative number $\alpha(R)$ called the area of R such that the following conditions are satisfied.

1) Congruence: If two triangles are congruent, then the associated triangular regions of the triangles have the same area.

2) Additivity: If R is the union of two nonoverlapping polygonal regions R_1 and R_2 , then $\alpha(R) = \alpha(R_1) + \alpha(R_2)$. Good

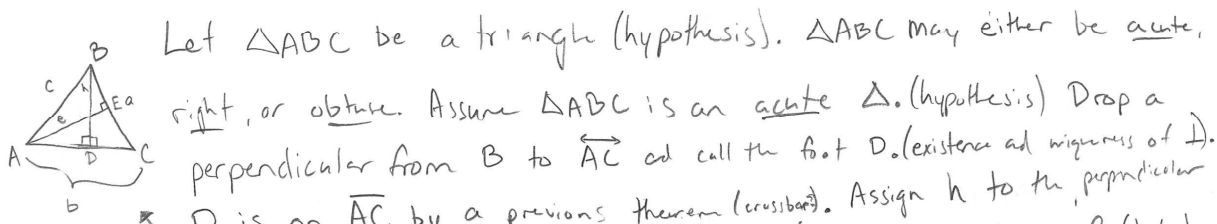
b) State the Euclidean Area Postulate.

If $\square ABCD$ is a rectangle, then $\alpha(\square ABCD) = AB \cdot BC$.

Great

3. State and prove the Law of Sines.

For any $\triangle ABC$, $\frac{\sin A}{a} = \frac{\sin B}{b} = \frac{\sin C}{c}$.

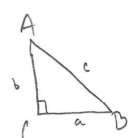


Let $\triangle ABC$ be a triangle (hypothesis). $\triangle ABC$ may either be acute, right, or obtuse. Assume $\triangle ABC$ is an acute \triangle . (hypothesis) Drop a perpendicular from B to \overline{AC} and call the foot D . (existence and uniqueness of \perp).

D is on \overline{AC} by a previous theorem (crossbar). Assign h to the perpendicular in this picture. So $\sin A = \frac{h}{c}$ $\sin C = \frac{h}{a}$ (algebra). $c \sin A = a \sin C$ (algebra).

$\frac{\sin A}{a} = \frac{\sin C}{c}$ (algebra). Drop a perpendicular from A to \overline{BC} , call it e and call the foot E (existence and uniqueness of perpendiculars). E is on \overline{BC} by the same previous theorem (crossbar). $\sin C = \frac{e}{b}$ and $\sin B = \frac{e}{c}$ so $e = b \sin C$ and $e = c \sin B$ (algebra)

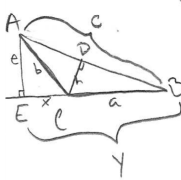
so $b \sin C = c \sin B$ so $\frac{\sin C}{c} = \frac{\sin B}{b}$ (algebra), so if $\triangle ABC$ is acute, $\frac{\sin A}{a} = \frac{\sin B}{b} = \frac{\sin C}{c}$.



Let $\triangle ABC$ be right. (hypothesis). Let C be the right angle without loss of generality (hypothesis). $\sin A = \frac{a}{c}$, $\sin B = \frac{b}{c}$, so $\frac{\sin A}{a} = \frac{1}{c} = \frac{\sin B}{b}$ (algebra). but $\sin C = \sin 90^\circ = 1$,

so $\frac{\sin A}{a} = \frac{\sin B}{b} = \frac{\sin C}{c}$ (algebra). Let $\triangle ABC$ be an obtuse triangle as

shown in the picture without loss of generality (hypothesis). Drop a perpendicular from C to \overline{AB} and call it h and call the foot D (existence and uniqueness of \perp). D is on \overline{AB} (crossbar). So $\sin B = \frac{h}{a}$ and $\sin A = \frac{h}{b}$ so $a \sin B = b \sin A$ (algebra).



$\frac{\sin B}{b} = \frac{\sin A}{a}$ (algebra). Drop a perpendicular from A to \overline{BC} call it e and call the foot E . (existence and uniqueness of perpendiculars). Call $\overline{EC} = x$ and $\overline{EB} = y$. $\sin B = \frac{e}{c}$ and $\sin \angle ECA = \frac{e}{x}$ (algebra).

$\angle ECA$ and $\angle ACB$ are supplements, so $\sin \angle ECA = \sin \angle ACB = \sin C$ (common sense).

so $c \sin B = b \sin C$ (algebra). So $\frac{\sin B}{b} = \frac{\sin C}{c}$ so $\frac{\sin A}{a} = \frac{\sin B}{b} = \frac{\sin C}{c}$ (algebra). \square

W

Correct

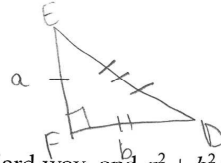
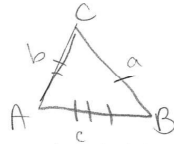
4. a) State a theorem (of your choice) from §6.2 about common perpendiculars.

If lines l and m admit a common perpendicular, then that common perpendicular is unique.

b) Provide good justifications in the blanks below for the corresponding statements:

Proposition: In hyperbolic geometry, if $\Delta ABC \sim \Delta DEF$, then $\Delta ABC \cong \Delta DEF$.

Statement:	Reason:
Let ΔABC and ΔDEF be two triangles such that $\Delta ABC \sim \Delta DEF$.	<i>Hypothesis</i>
If any one side of ΔABC is congruent to the corresponding side of ΔDEF , then $\Delta ABC \cong \Delta DEF$.	<i>ASA</i>
Now s'pose $AB \neq DE$, $BC \neq EF$, and $AC \neq DF$.	<i>RAA hypothesis</i>
Without loss of generality, assume $AB > DE$ and $AC > DF$.	<i>Pigeonhole principle or, one is not enough</i>
Choose a point B' on \overline{AB} such that $AB' = DE$ and choose a point C' on \overline{AC} such that $AC' = DF$. Then $\square BCC'B'$ is convex.	<i>Point Construction Postulate and Theorem 4.6.7</i>
Then $\Delta AB'C' \cong \Delta DEF$.	<i>SAS</i>
So $\angle AB'C' \cong \angle ABC$ and $\angle AC'B' \cong \angle ACB$.	<i>Definition of Similar Triangles</i>
$\angle BB'C'$ is the supplement of $\angle AB'C'$ and $\angle CC'B'$ is the supplement of $\angle AC'B'$.	<i>Linear Pair</i>
$\sigma(\square BCC'B') = 360^\circ$	<i>Algebra</i>
But this is a contradiction, so $\Delta ABC \cong \Delta DEF$	<i>Theorem 6.1.3</i>



5. Show that if $\triangle ABC$ is a triangle labeled in the standard way, and $a^2 + b^2 = c^2$, then $\angle BCA$ is a right angle.

Let $\triangle ABC$ be a triangle such that $a^2 + b^2 = c^2$. (hyp).

Let $\triangle DEF$ be a triangle such that $BC = EF$, $AC = DF$, and $\angle EFD$ is a right angle. (Ruler Postulate, Protractor Postulate)

Then $a^2 + b^2 = ED^2$ (Pythagorean Theorem)

$$ED^2 = c^2 \text{ (algebra)}$$

$$ED = c \text{ (algebra)}$$

Great

Then $\triangle ABC \cong \triangle DEF$ (SSS)

$\angle BCA \cong \angle EFD$ (def of congruent triangles)

$\angle EFD$ is a right angle $\therefore \angle BCA$ is a right angle (def of congruent triangles) \square